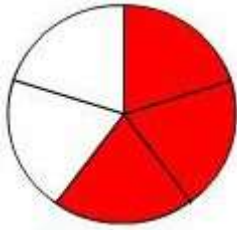


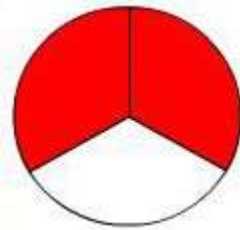
Hoe groot is het rode deel? En het witte deel?



Hele taart:  $\frac{5}{5}$

Rode deel:

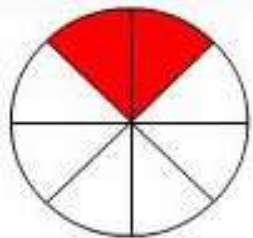
Witte deel:



Hele taart:  $\frac{3}{3}$

Rode deel:

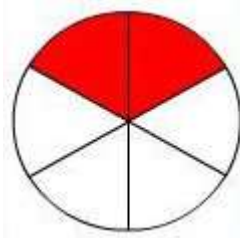
Witte deel:



Hele taart:  $\frac{8}{8}$

Rode deel:

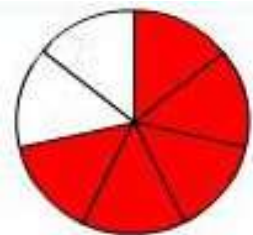
Witte deel:



Hele taart:  $\frac{6}{6}$

Rode deel:

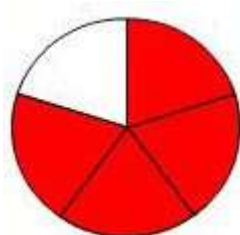
Witte deel:



Hele taart:  $\frac{7}{7}$

Rode deel:

Witte deel:



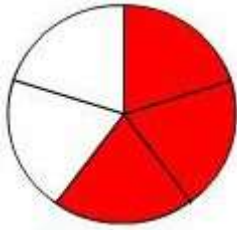
Hele taart:  $\frac{5}{5}$

Rode deel:

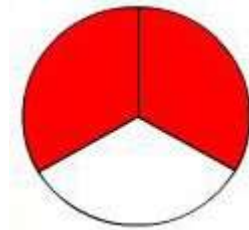
Witte deel:



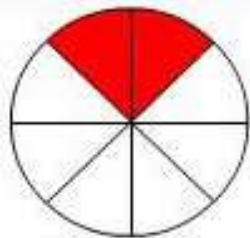
## Antwoorden



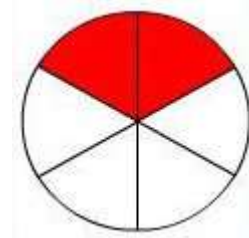
Hele taart:  $\frac{5}{5}$   
Rode deel:  $\frac{3}{5}$   
Witte deel:  $\frac{2}{5}$



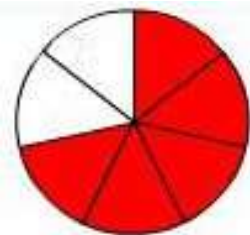
Hele taart:  $\frac{3}{3}$   
Rode deel:  $\frac{2}{3}$   
Witte deel:  $\frac{1}{3}$



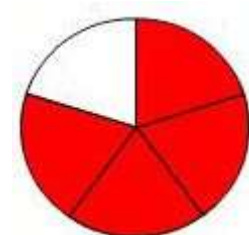
Hele taart:  $\frac{8}{8}$   
Rode deel:  $\frac{2}{8}$   
Witte deel:  $\frac{6}{8}$



Hele taart:  $\frac{6}{6}$   
Rode deel:  $\frac{2}{6}$   
Witte deel:  $\frac{4}{6}$



Hele taart:  $\frac{7}{7}$   
Rode deel:  $\frac{5}{7}$   
Witte deel:  $\frac{2}{7}$



Hele taart:  $\frac{5}{5}$   
Rode deel:  $\frac{4}{5}$   
Witte deel:  $\frac{1}{5}$

